


Shepherding

Location: The shepherd's hut and inside no. 2



**Rural
Life
Centre**

The Shepherd's Hut

What is the object at A?

.....

What does B let in?

What does the shape remind you of?

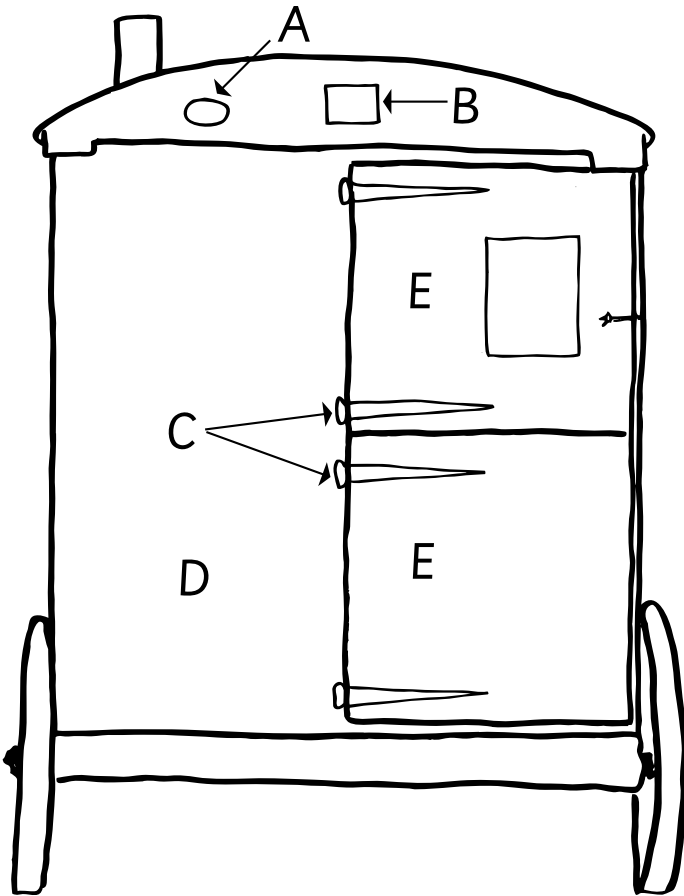
What are the things labelled C called?

What is the wall at D made of?

The double doors, E, are made of

What other buildings have doors cut in half like this?

.....



The axles are made of

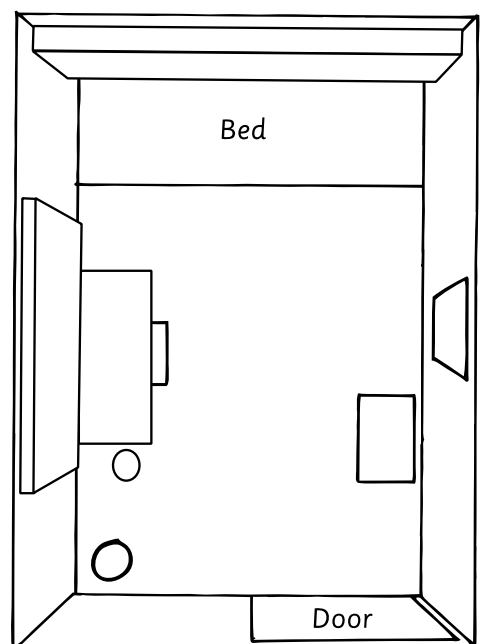
The wheels are made of

Plan of the hut

as it would be seen by a fly on the ceiling


Look at this numbered list of things in the hut, then put the numbers in the right places on the plan, the first has been done for you. Then find four other items in the hut, mark them on the plan and name them below.

- | | | |
|----------------|-----------------|----------|
| 1 Lantern | 2 Tea bottle | 3 Crooks |
| 4 Turnip knife | 5 Branding iron | 6 Shears |
| 7 Washing bowl | 8 | 9 |
| 10 | 11 | |

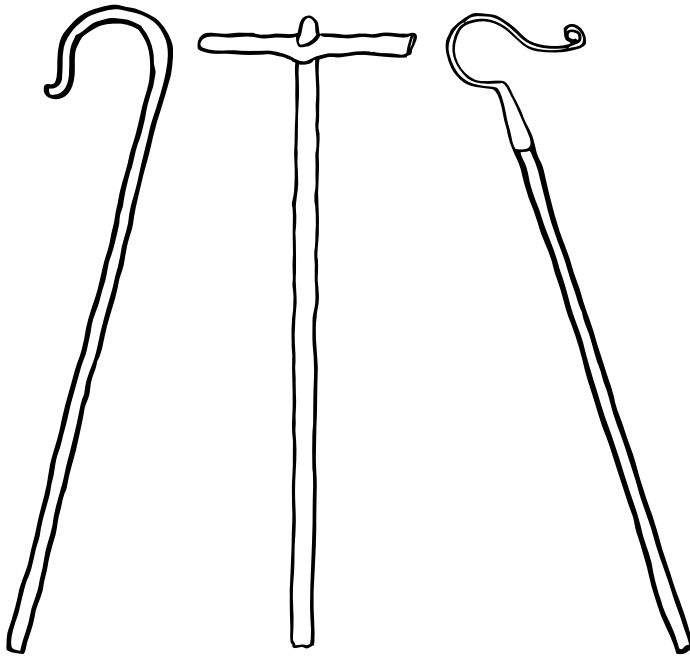


Shepherding

Location: The shepherd's hut and inside no. 2



**Rural
Life
Centre**



.....
crook

.....
crook

.....
crook

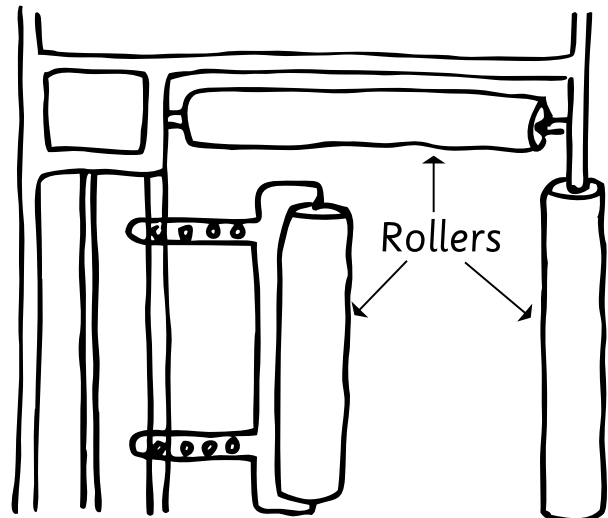
Crooks

for catching by the leg, dipping and for catching by the neck. But which crook is for which purpose? Write the correct name beneath each drawing.

In the space below draw some bells or branding irons.

Outside the hut


Find the lamb creep. This was made to separate the ewe from the lambs if needed. The left hand roller is adjustable.



When you have finished looking around the shepherd's hut, go inside building number 3, and next to the wood turner's workshop you will find the exhibits which will help you complete the last questions on this worksheet on the next sheet.

Shepherding


Location: The shepherd's hut and inside no. 2



**Rural
Life
Centre**

Fencing and Pens

Look for the wattle hurdles and wooden fencing that the shepherd used to make his folds. Draw them below.



This wheel is part of what piece of equipment?

.....

Draw in the rest of the machine.

Name three more pieces of machinery or equipment which you can see here.

1


2

3

Now draw one of them below.

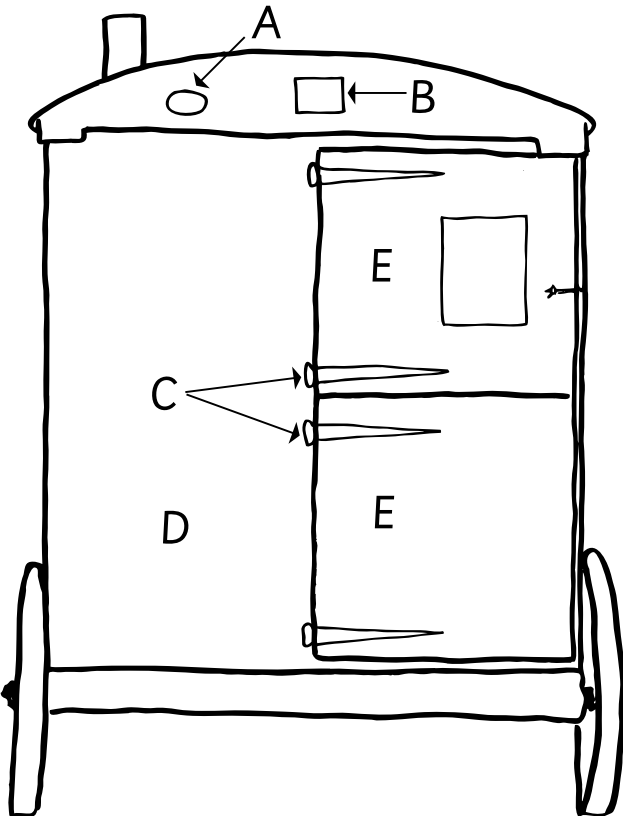
Shepherding

Location: The shepherd's hut and inside no. 2



**Rural
Life
Centre**

Teachers' Notes



The Shepherd's Hut

The lettered parts are: A — Maker's plate; B — Air vent; C — Door hinges; D — Corrugated iron; E — Wood.

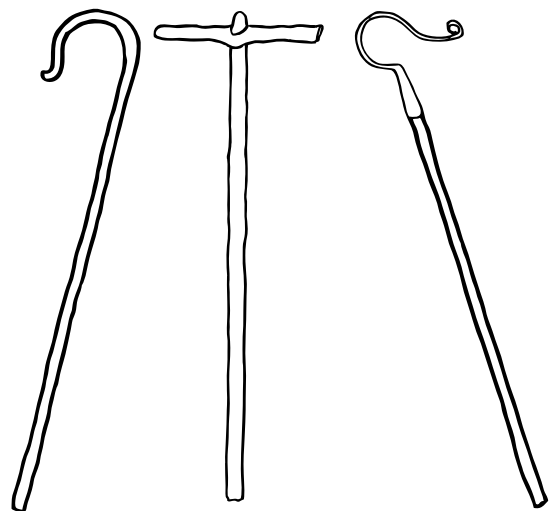
Stables have doors cut in half like the shepherd's hut (and so do some houses).

The axles are made of wood and iron, the wheels of cast iron.

The items inside the shepherd's hut may have been moved around so please check their positions.

Crooks

Illustrated right are (left to right) neck, dipping and leg crooks



The wheel is part of a hand-driven sheep shearing machine.

Also on display here are a turnip chopper, dipping trough, a lantern and a shepherd's smock among other items.